




HOLIDAY GIFT SHOPPING



You have \$10 to spend at the Holiday Gift Shop.

Choose from the items above to complete each of the holiday shopping lists below.

Each list should equal \$10 or less.

Example: What gifts can you buy for three family members?

$$\begin{array}{ccccccc} \underline{\$2 \text{ Ornament}} & + & \underline{\$4 \text{ Mug}} & + & \underline{\$3 \text{ Crayons}} & = & \underline{\$9 \text{ total}} \\ \text{Mom} & & \text{Dad} & & \text{Brother} & & \end{array}$$

What gifts can you buy for your two favorite teachers?

$$\underline{\hspace{2cm}} + \underline{\hspace{2cm}} = \underline{\$ \hspace{2cm}}$$

What gifts can you buy for your three best friends?

$$\underline{\hspace{2cm}} + \underline{\hspace{2cm}} + \underline{\hspace{2cm}} = \underline{\$ \hspace{2cm}}$$

What gifts can you buy for four family members?

$$\underline{\hspace{2cm}} + \underline{\hspace{2cm}} + \underline{\hspace{2cm}} + \underline{\hspace{2cm}} = \underline{\$ \hspace{2cm}}$$

What would you buy for just yourself?